

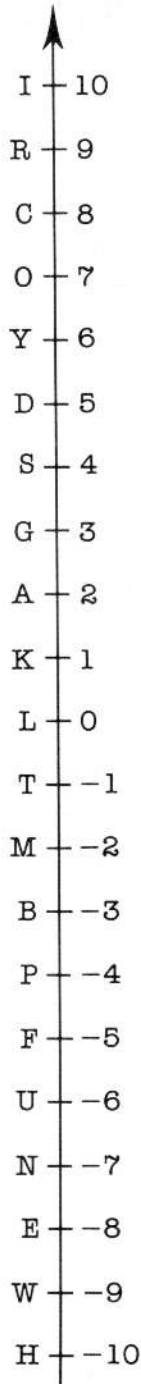


What did the cat get when it crossed the desert on Christmas Eve?



Number line



1 $x + 7 = 11$

2 $13x = 26$

3 $x + 8 = 1$

4 $4x = 20$

5 $\frac{x}{2} = 3$

6 $c - 12 = -4$

Solve the equations and locate the answer on the number line. The letter at that position and the question number gives the puzzle code.

7 $x + 5 = 5$

8 $\frac{x}{2} = 1$

9 $3x = -27$

10 $x - 7 = -3$

1	2	3	4	5	6	7	8	9	10
---	---	---	---	---	---	---	---	---	----